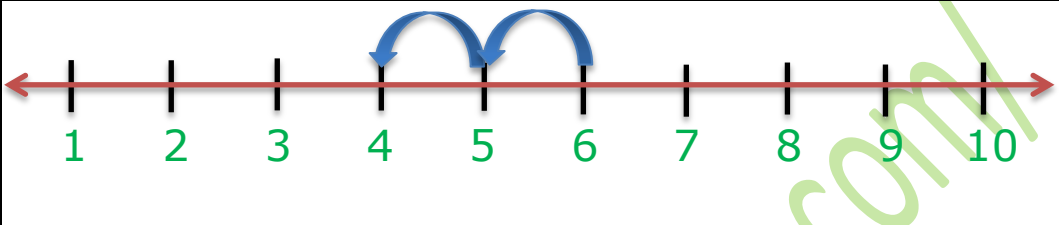
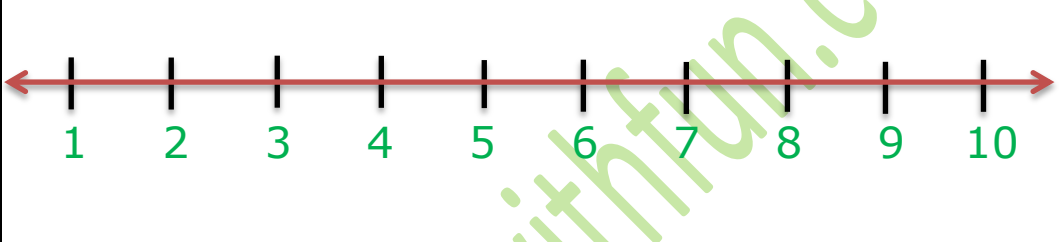
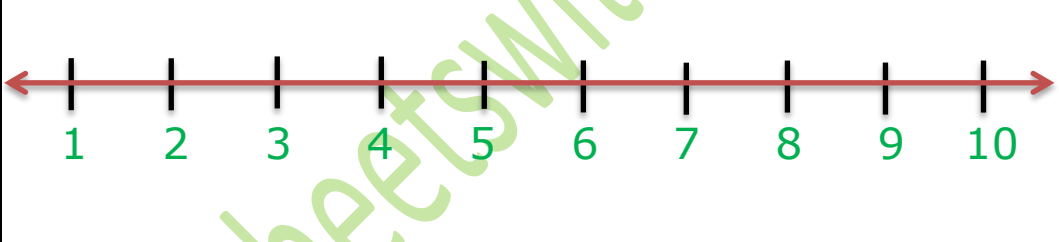
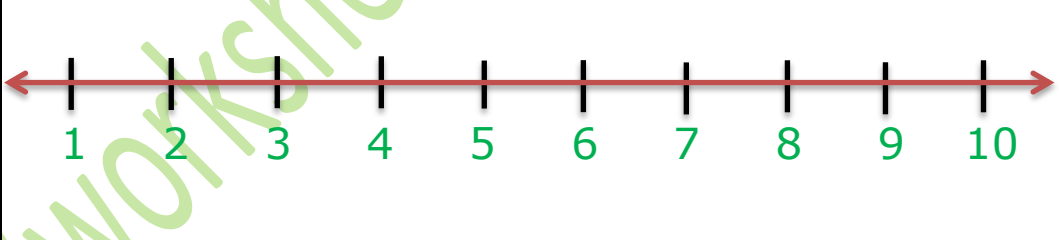
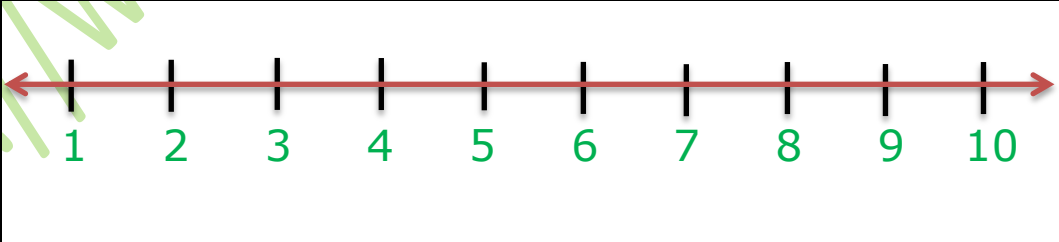
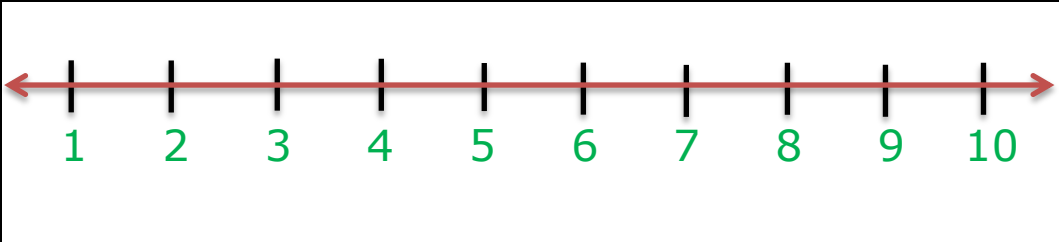
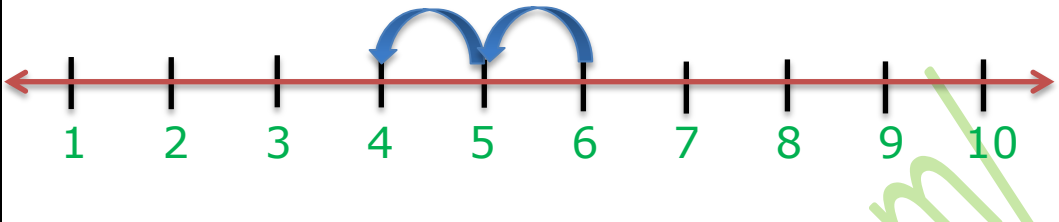
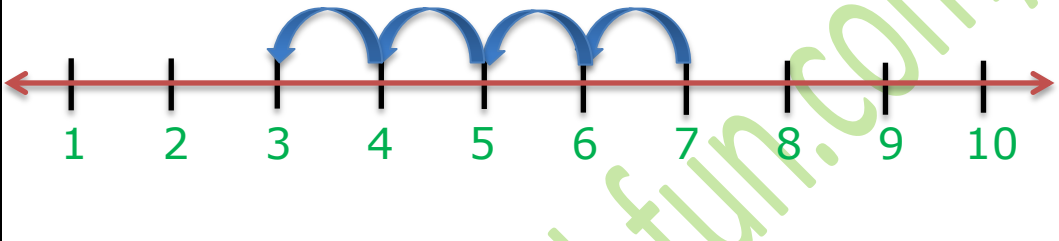
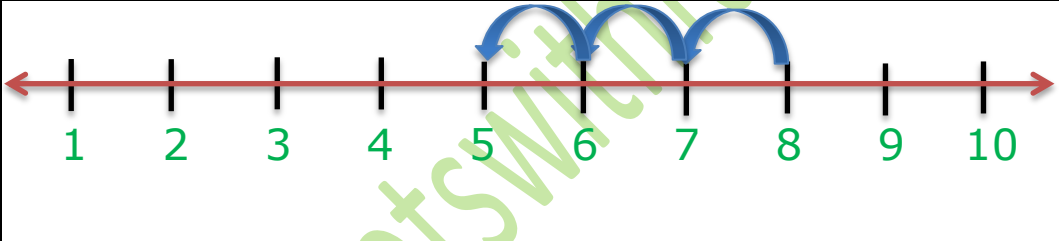
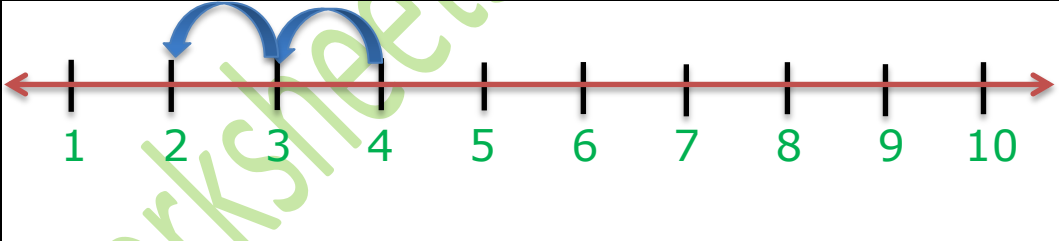
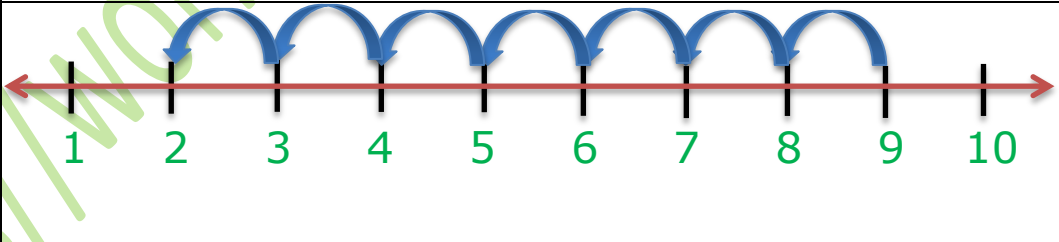
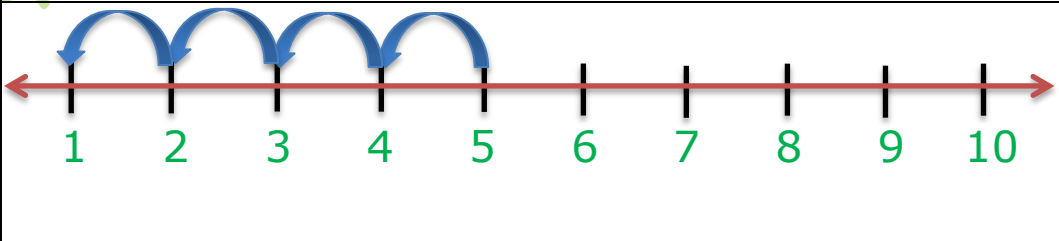


Name: _____ Date: _____

Subtraction on Number Line

$6 - 2 = 4$	
$7 - 4 = \underline{\quad}$	
$8 - 3 = \underline{\quad}$	
$4 - 2 = \underline{\quad}$	
$9 - 7 = \underline{\quad}$	
$5 - 4 = \underline{\quad}$	

Subtraction on Number Line

$6 - 2 = 4$	 A number line from 1 to 10. Two blue curved arrows start at 6 and point to 5, and from 5 to 4. The number 4 is underlined in red.
$7 - 4 = \underline{3}$	 A number line from 1 to 10. Four blue curved arrows start at 7 and point to 6, 5, 4, and 3. The number 3 is underlined in red.
$8 - 3 = \underline{5}$	 A number line from 1 to 10. Three blue curved arrows start at 8 and point to 7, 6, and 5. The number 5 is underlined in red.
$4 - 2 = \underline{2}$	 A number line from 1 to 10. Two blue curved arrows start at 4 and point to 3, and from 3 to 2. The number 2 is underlined in red.
$9 - 7 = \underline{2}$	 A number line from 1 to 10. Seven blue curved arrows start at 9 and point to 8, 7, 6, 5, 4, 3, and 2. The number 2 is underlined in red.
$5 - 4 = \underline{1}$	 A number line from 1 to 10. Four blue curved arrows start at 5 and point to 4, 3, 2, and 1. The number 1 is underlined in red.