


Name: \_\_\_\_\_ Date: \_\_\_\_\_

Subtraction


How many are left?




$$\underline{\quad} - \underline{\quad} = \underline{\quad}$$



$$\underline{\quad} - \underline{\quad} = \underline{\quad}$$




$$\underline{\quad} - \underline{\quad} = \underline{\quad}$$



$$\underline{\quad} - \underline{\quad} = \underline{\quad}$$

Subtraction


How many are left?




$$\underline{\quad 14 \quad} - \underline{\quad 2 \quad} = \underline{\quad 12 \quad}$$



$$\underline{\quad 15 \quad} - \underline{\quad 4 \quad} = \underline{\quad 11 \quad}$$



$$\underline{\quad 11 \quad} - \underline{\quad 3 \quad} = \underline{\quad 8 \quad}$$



$$\underline{\quad 12 \quad} - \underline{\quad 4 \quad} = \underline{\quad 8 \quad}$$