


Name: _____ Date: _____

Subtraction


How many are left?



$$\underline{\quad\quad} - \underline{\quad\quad} = \underline{\quad\quad}$$




$$\underline{\quad\quad} - \underline{\quad\quad} = \underline{\quad\quad}$$



$$\underline{\quad\quad} - \underline{\quad\quad} = \underline{\quad\quad}$$

Subtraction


How many are left?



$$\underline{12} - \underline{2} = \underline{10}$$



$$\underline{16} - \underline{4} = \underline{12}$$



$$\underline{13} - \underline{5} = \underline{8}$$