






Name: \_\_\_\_\_ Date: \_\_\_\_\_

Addition (Word Problems)

Q1. There are 4 bikes. 3 more bikes come. How many are there now?	Solution:
Q2. I have 5 flowers. I am given 4 flowers more. How many flowers do I have?	Solution:
Q3. Timmy has 4 balls. Jimmy has 4 balls. How many balls do they have in all?	Solution:
Q4. I bought 6 eggs on Tuesday I bought 2 eggs on Wednesday. How many eggs did I buy?	Solution:
Q5. There are 5 cows. 2 more come. How many cows are there now?	Solution:
Q6. There are 3 cups in one tray. 2 cups in another tray. How many cups are there altogether?	Solution:

Addition (Word Problems)

Q1. There are 4 bikes. 3 more bikes come. How many are there now?	<b>Solution:</b> $\begin{array}{r} 4 \\ + 3 \\ \hline 7 \end{array}$ 
Q2. I have 5 flowers. I am given 4 flowers more. How many flowers do I have?	<b>Solution:</b> $\begin{array}{r} 5 \\ + 4 \\ \hline 9 \end{array}$ 
Q3. Timmy has 4 balls. Jimmy has 4 balls. How many balls do they have in all?	<b>Solution:</b> $\begin{array}{r} 4 \\ + 4 \\ \hline 8 \end{array}$ 
Q4. I bought 6 eggs on Tuesday I bought 2 eggs on Wednesday. How many eggs did I buy?	<b>Solution:</b> $\begin{array}{r} 6 \\ + 2 \\ \hline 8 \end{array}$ 
Q5. There are 5 cows. 2 more come. How many cows are there now?	<b>Solution:</b> $\begin{array}{r} 5 \\ + 2 \\ \hline 7 \end{array}$ 
Q6. There are 3 cups in one tray. 2 cups in another tray. How many cups are there altogether?	<b>Solution:</b> $\begin{array}{r} 3 \\ + 2 \\ \hline 5 \end{array}$ 