



Name: \_\_\_\_\_ Date: \_\_\_\_\_

Addition by Counting


Count the number of objects, write the numbers and find the sum.



+




=




+




=



+



=




+





=


Addition by Counting

Count the number of objects, write the numbers and find the sum.


$$\begin{array}{c} \boxed{6} \end{array} + \begin{array}{c} \boxed{2} \end{array} = \begin{array}{c} \boxed{8} \end{array}$$


$$\begin{array}{c} \boxed{5} \end{array} + \begin{array}{c} \boxed{2} \end{array} = \begin{array}{c} \boxed{7} \end{array}$$


$$\begin{array}{c} \boxed{6} \end{array} + \begin{array}{c} \boxed{3} \end{array} = \begin{array}{c} \boxed{9} \end{array}$$


$$\begin{array}{c} \boxed{5} \end{array} + \begin{array}{c} \boxed{3} \end{array} = \begin{array}{c} \boxed{8} \end{array}$$