




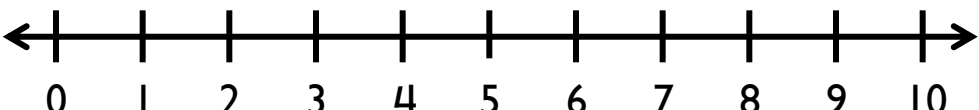


NAME: _____ DATE: _____

Addition on Number Line

$5 + 3 = \underline{\quad}$	 <p>A horizontal number line with arrows at both ends, marked with integers from 0 to 10. Each integer is labeled with its corresponding number below the tick mark.</p>
$8 + 1 = \underline{\quad}$	 <p>A horizontal number line with arrows at both ends, marked with integers from 0 to 10. Each integer is labeled with its corresponding number below the tick mark.</p>
$6 + 3 = \underline{\quad}$	 <p>A horizontal number line with arrows at both ends, marked with integers from 0 to 10. Each integer is labeled with its corresponding number below the tick mark.</p>
$1 + 8 = \underline{\quad}$	 <p>A horizontal number line with arrows at both ends, marked with integers from 0 to 10. Each integer is labeled with its corresponding number below the tick mark.</p>
$5 + 4 = \underline{\quad}$	 <p>A horizontal number line with arrows at both ends, marked with integers from 0 to 10. Each integer is labeled with its corresponding number below the tick mark.</p>
$2 + 5 = \underline{\quad}$	 <p>A horizontal number line with arrows at both ends, marked with integers from 0 to 10. Each integer is labeled with its corresponding number below the tick mark.</p>