


NAME: _____


CLASS: _____

Counting Backwards


Instructions: Count backward and write the missing numbers (10-1).



10			7	
	4			1



	9			
5			2	



10		8		
				1