

Name: _____ Date: _____

Plane Shapes

Write the name of the shape, number of sides and number of corners.

Name : _____

No. of corners : _____

No. of sides : _____



Name : _____

No. of corners : _____

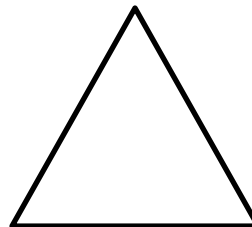
No. of sides : _____



Name : _____

No. of corners : _____


No. of sides : _____



Name : _____

No. of corners : _____

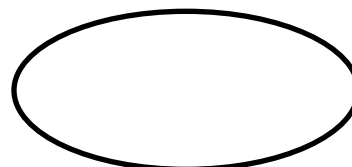
No. of sides : _____



Name : _____

No. of corners : _____

No. of sides : _____



Plane Shapes

Write the name of the shape, number of sides and number of corners.

Name : **Rectangle**

No. of corners : **4**

No. of sides : **4**



Name : **Square**

No. of corners : **4**


No. of sides : **4**



Name : **Triangle**

No. of corners : **3**


No. of sides : **3**



Name : **Circle**

No. of corners : **0**

No. of sides : **0**



Name : **Oval**

No. of corners : **0**

No. of sides : **0**

